

Dear Parents/Guardians

We hope that you are well.

Please note that this work does not need to be printed and all you will need are a few sheets of paper. Please keep all completed work so that it can be handed in when school opens.

Home Language : English

Parents/guardians, please draw and write the following table and sentences. Allow the learners to complete the table and read the sentences. Ask the learners to identify "o" sound.

Draw a picture		Day 1	Day 2	Day 3	Day 4	Day 5
	hot					
	pot					
	not					
	got					
	hop					
	top					
	pop					
	mop					

Sentences:

1. The pot is hot.
2. I use a mop to clean.
3. Can you spin the top?

Children can write two more of their own simple sentences using the words from the table above.

Sight words: write the following words on pieces of paper, stick them around your home so that learners can revise them every time they see it.

good and come here

Lockdown News

Children to keep a picture diary. Parents/Guardians to please assist with the date and heading. Allow children to draw a picture of the best part of their week. Parents/ Guardians could write a short caption below the picture.

Eg 11 May 2020
Lockdown News

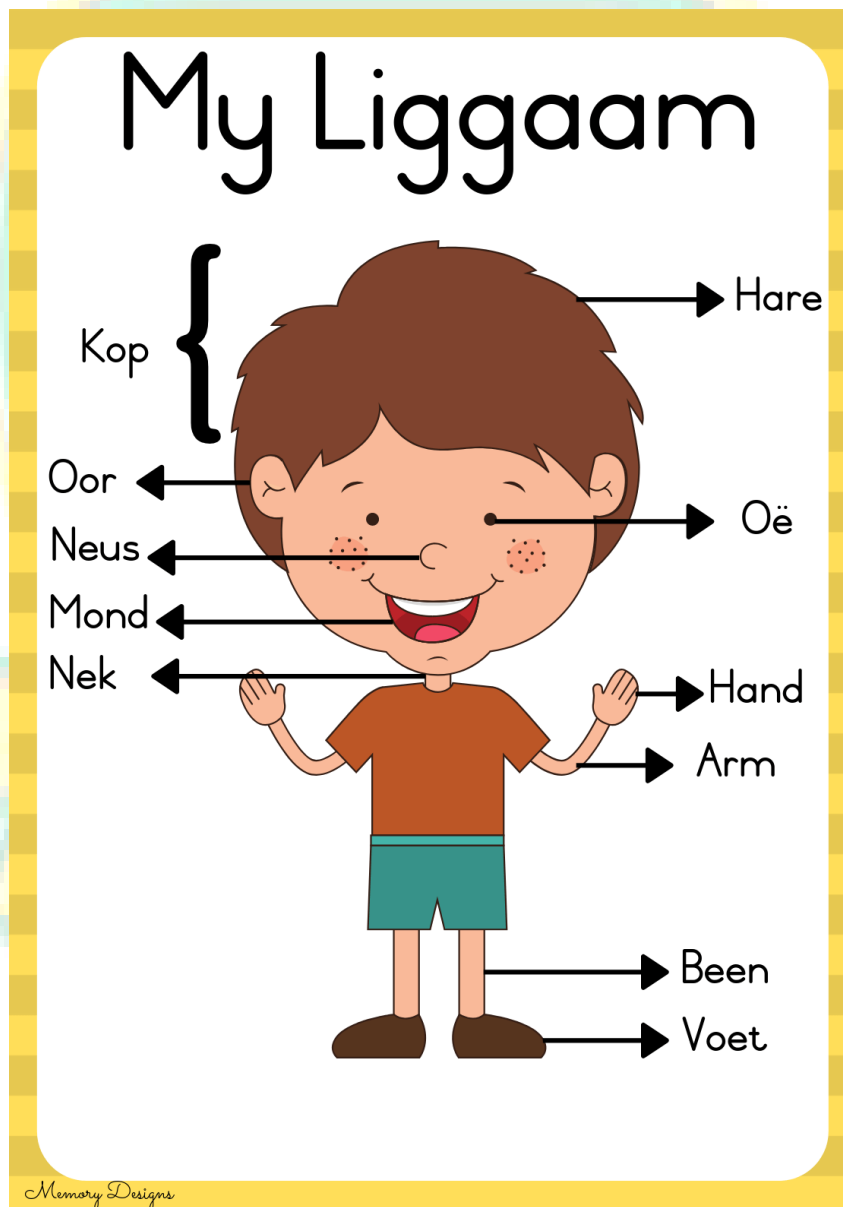
First Additional Language: Afrikaans

Revise: Nommers (Numbers)

Dae van die week (Days of the week)

Kleure (Colours)

My liggaam (My body)



Mathematics

Count in ones forward and backwards 0-45

Count in tens forwards and backwards 0-100

(Use the number chart for guidance)

Sums: Please allow learners to use objects to calculate the following if necessary.

Monday	Tuesday	Wednesday	Thursday	Friday
$3 + 1 =$	$1 + 1 =$	$7 + 2 =$	$1 + 1 + 1 =$	$2 + 2 + 1 =$
$4 - 1 =$	$1 + 2 =$	$2 + 4 =$	$1 + 2 + 1 =$	$1 + 1 + 3 =$
$4 - 3 =$	$3 + 4 =$	$2 + 3 =$	$2 + 2 + 2 =$	$2 + 3 + 1 =$
$3 + 2 =$	$5 - 1 =$	$8 + 0 =$	$5 - 1 - 1 =$	$2 + 1 + 2 =$
$5 - 2 =$	$7 - 3 =$	$10 - 1 =$	$4 - 2 - 1 =$	$5 - 2 - 1 =$
$1 + 3 =$	$4 + 2 =$	$9 - 3 =$	$3 - 1 - 1 =$	$8 - 2 - 1 =$
$6 - 1 =$	$5 + 2 =$	$8 - 5 =$	$5 + 4 - 2 =$	$7 + 2 - 4 =$

Word Problems : Please read these out to your child. Allow them to draw a picture and write the sum to work out the answer.

Jack has 5 pencils. His dad gives him 3 more. How many pencils does Jack have now?

Bobby has 7 cookies. He eats 3 cookies. How many cookies does Bobby have now?

DBE Blue Books

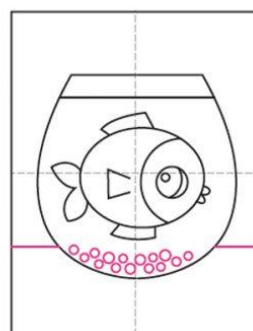
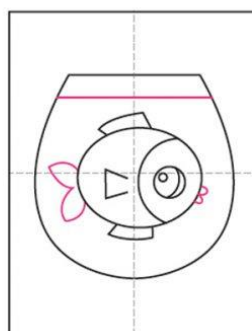
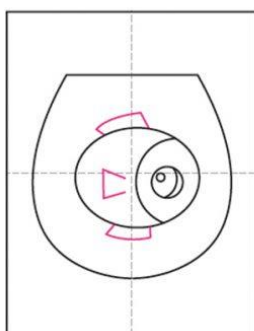
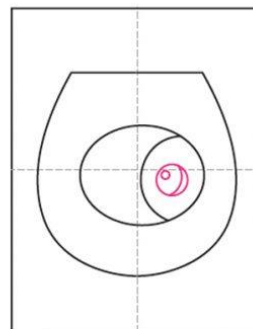
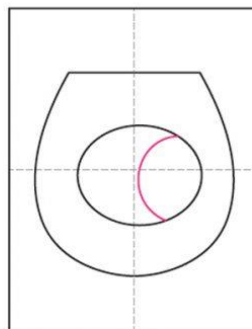
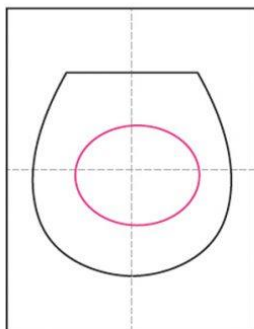
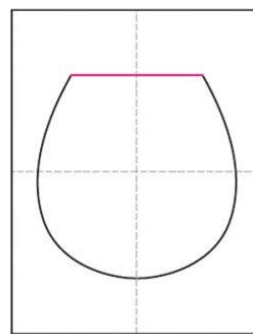
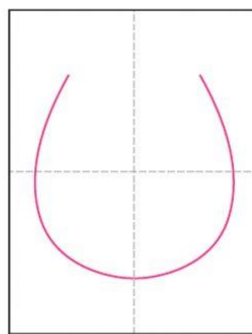

DBE Blue Books may be completed at the learners own pace. Please encourage learners to read the sentences in the Home Language book daily.

Family Experiences

Create your own board game, using recyclables, to play as a family.

Read a story together, allow learners to turn the page.

Follow these steps to complete this picture. This is a fun activity for the whole family. The picture can be coloured in with pencils or crayons.



Please stay safe and healthy, we miss all our Grade 1s and we can't wait to see them soon!

Kind regards

The Grade One Team

GOODWILL