

EMMARENTIA PRIMARY SCHOOL
GRADE ONE HOMEWORK – 15 TO 19 JUNE

Dear Parents/Guardians

I hope you are well and enjoy the time with your children. We will continue with the weekly homework to keep the learners on track.

ENGLISH

Read the following:

The men like hens. They have ten hens. The hens lay eggs. The men like to eat eggs.

Answer the following questions:

1. How many hens do the men have?

2. Name two things that the men like.

3. How many hens are there?

4. Do you think the men will get enough eggs from the hens? Give a reason for your answer.

Use the following words in sentences:

hens: _____

men: _____

ten: _____

eggs: _____

Write out these words and learn them:

WORDS	DAY 1	DAY 2	DAY 3	DAY 4	DAY 5
ten					
hens					
men					
eggs					

Rewrite the sentence in the correct order:

ten I years am old _____

Draw a picture of you and your friends playing in the snow.

Write a story of at least three sentences about your picture.

AFRIKAANS


Leer die volgende woorde (learn the following words):




baba



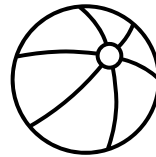
appel



gesig



huis




bal



sambreel

Skryf die woorde neer (write down the words):

--	--	--	--	--	--



Ons sit.




Die kat sit.




Ek huil.



Ons dans



Die hond staan.



Ek staan

Skryf die sinne neer (write down the sentences):

MATHEMATICS

Count in fives and tens and fill in the missing numbers:

1	2	3	4		6	7	8	9	
11	12	13	14		16	17	18	19	
21	22	23	24		26	27	28	29	
31	32	33	34		36	37	38	39	
41	42	43	44		46	47	48	49	

Bonds of 7:

sum	work it out
7 - 0 =	
7 - 1 =	
7 - 2 =	
7 - 3 =	
7 - 4 =	
7 - 5 =	
7 - 6 =	
7 - 7 =	

I had 10 eggs. I broke 3 eggs. I used another 5 eggs. How many eggs were left?

Picture:

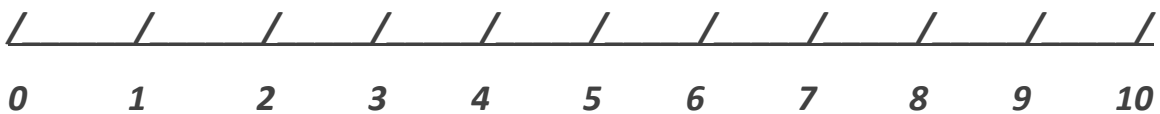
Sum:

Answer:

Do the following sums:

$8 + 1 = \underline{\quad}$	$9 + \underline{\quad} = 11$
$4 + \underline{\quad} = 8$	$2 + 2 + 3 = \underline{\quad}$
$5 + \underline{\quad} = 9$	$3 - 2 + 4 = \underline{\quad}$
$6 - 2 + 4 = \underline{\quad}$	$7 - 4 + 3 = \underline{\quad}$
$9 - \underline{\quad} = 4$	$\underline{\quad} - 5 = 5$

Use the number line and work out the sum:



$5 + 3 + 2 = \underline{\quad}$